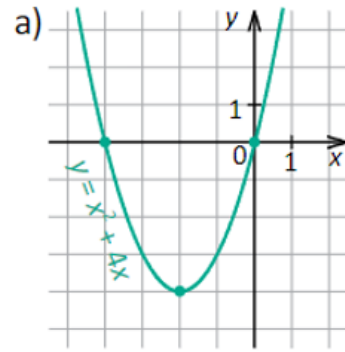
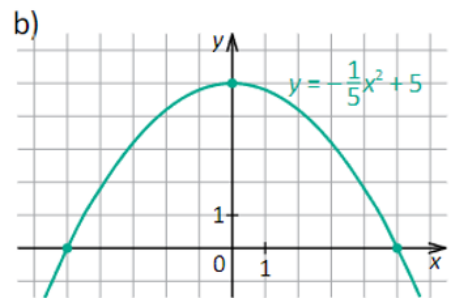


Uzdevums: nosaki intervālus, kuros funkcijas vērtības ir pozitīvas un intervālus, kuros funkcijas vērtības ir negatīvas

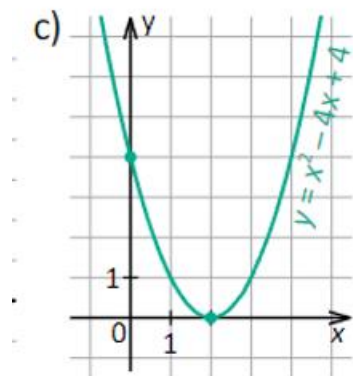
$y > 0$	
$y < 0$	



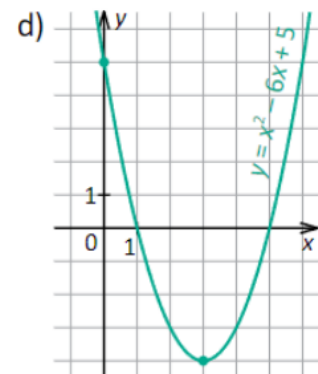
$y > 0$	
$y < 0$	



$y > 0$	
$y < 0$	



$y > 0$	
$y < 0$	



$y > 0$	
$y < 0$	

$y > 0$	
$y < 0$	

$y > 0$	
$y < 0$	

$y > 0$	
$y < 0$	

